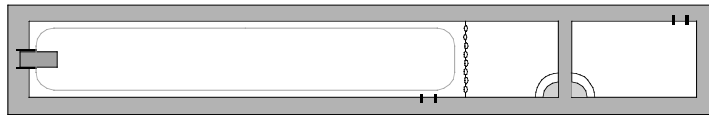


PHYZ SPRINGBOARD:

CAPACITANCE



The flash of a camera and the jolt provided by a heart defibrillator require sudden bursts of electric energy. The relatively small batteries used in these devices could not supply such bursts without the use of capacitors. Capacitors are devices that store energy in the form of an electric field. This energy can be delivered to an electric circuit very rapidly.

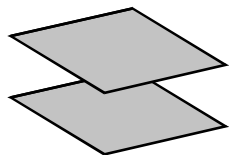
The field is typically produced by separating opposite charges on two parallel plates. To understand capacitors, we must examine the process in detail.

1. Consider two parallel plates. To transfer charge from one plate to another so that one plate becomes charged positive while the other becomes charged negative, we must do

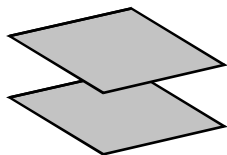
_____ on the charge.

2. What becomes of the _____ we do to separate the charge?

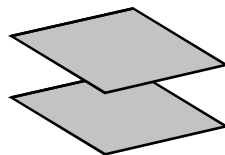
3. a. As we separate more and more charge, moving additional charge from one plate to another
 ___ becomes harder. ___ becomes easier. ___ maintains a constant level of difficulty.



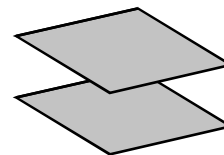
Plates uncharged



Plates slightly charged



Plates more charged



Plates highly charged

b. This is because...

c. The more accurate mechanical analogy to the work done to separate the charge would be
 ___ lifting a heavy stone ___ compressing a stiff spring

4. a. As the battery continues to separate charge on the two parallel plates, what prevents it from moving *all* the charge so that one plate has only positive charge and the other has only negative charge?

b. If a battery with a larger voltage were used, would it separate ___ more charge, ___ less charge, or ___ the same amount of charge?

5. How—if at all—is the amount of charge separated on the plates (Q) related to the voltage of the battery (V)?

___ $Q \propto V$

___ $Q \propto 1/V$

___ Q and V are unrelated

6. Not all parallel plates are identical. Some plates are bigger, some are smaller; some are closer together, some are farther apart. Suppose a battery connected to one set of plates separates a large amount of charge but the same battery connected to another set of plates separates only a small amount of charge.

The plates on which the large charge separation occurred have
 a higher capacity (high **capacitance**) than the other plates.
 a lower capacity (low **capacitance**) than the other plates.

7.a. Which expression best represents **capacitance**, denoted with the symbol C ?

$C = QV$ $C = Q/V$ $C = V/Q$

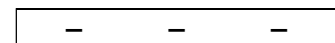
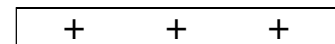
b. Is this expression consistent with the proportionality selected in question 5 above? If so, rewrite the proportionality as an equation.

c. What are the SI units of capacitance and what is the abbreviation for these units?

d. A pair of plates with a high capacitance is one that can
 hold a great quantity of charge at a high potential.
 hold a great quantity of charge at a low potential.
 hold a small quantity of charge at a low potential.

8. Suppose a battery were used to separate charge on two parallel plates. The battery has moved all the charge it can. Sketch the forces acting on the negative charge on the right end of the lower plate.

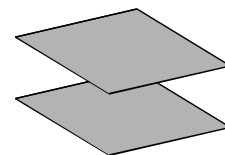
a. What effect do these forces have on the two plates?



b. What effect do these forces have on the neighboring charges?

c. Which forces would be reduced if the plates were moved farther apart? (Check all that apply.)

Those that cause the plate charges to attract.
 Those that cause the plate charges to repel.

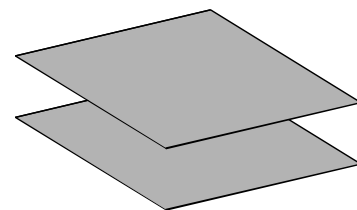


CAPACITOR CHARACTERISTICS

9.a. What will be the effect of increasing the area of the plates?

More charge can be stored at the same potential.
 Less charge can be stored at the same potential.
 The same amount of charge can be stored.

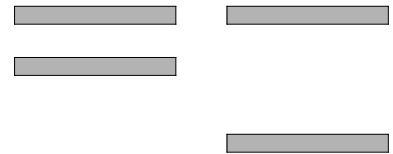
b. Why? Discuss the forces involved.



c. Determine the amount of charge that can be separated in terms of the potential difference of the battery, the area of the plates, and the distance between the plates. Hints: consider the relationship between the voltage, electric field, and distance, then consider the relationship between the uniform electric field, charge, area, and distance.

d. Examine the equation from part c above. With constant potential and distance and increased plate area,
 more charge can be stored.
 less charge can be stored.
 the same amount of charge can be stored.

10. a. What will be the effect of increasing the distance between the plates?
 More charge can be stored.
 Less charge can be stored.
 The same amount of charge can be stored.



b. Why? Discuss the forces involved.

c. Examine the equation from part c of number 9 above. With constant voltage and area and increased plate separation,
 more charge can be stored.
 less charge can be stored.
 the same amount of charge can be stored.

d. Another way to increase the capacitance of a set of parallel plates is to place a sheet of a dielectric (insulating) material between the plates. But that's a story for another course.

11. a. Summarize your findings regarding plate area and separation distance.
 $C \propto Ad$ $C \propto A/d$ $C \propto d/A$

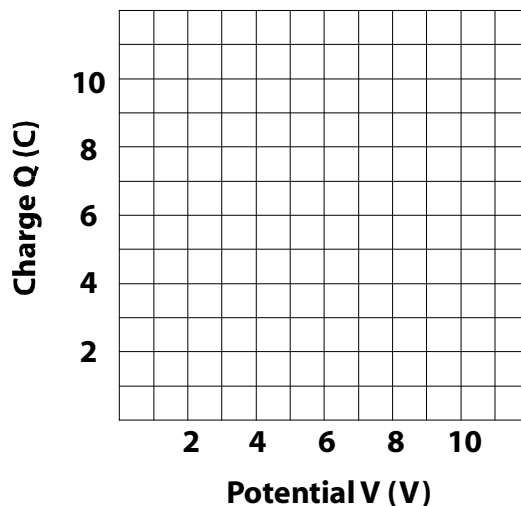
b. Describe the characteristics of a high capacitance capacitor.

c. A constant of proportionality, ϵ_0 , turns this proportionality into an equation. The constant is called the **permittivity of free space**. Rewrite the proportionality as an equation.

ENERGY STORAGE

12. Suppose a variable voltage power supply were used to charge a 1.0 F capacitor. What would happen as the voltage was increased from 0 to 12 V?

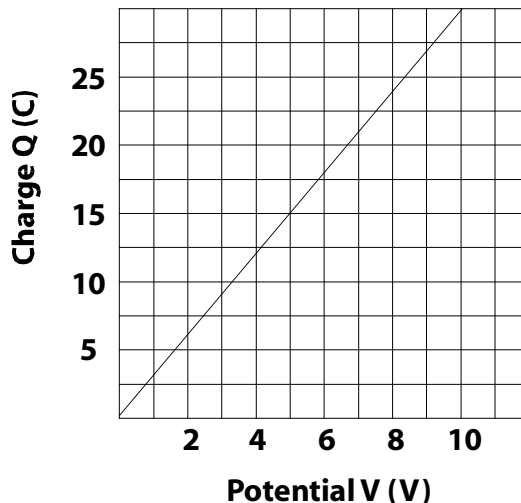
- a. Describe the result and plot it on the axes to the right.
- b. What is the area bounded by the plot?
 - i. Write an equation.
 - ii. Calculate the area. Don't forget the units.



c. What does that area represent?

d. Another capacitor is charged with a variable voltage power supply. It yields the plot shown to the right.

- i. What is the capacitance of the capacitor?
- ii. How much electrical energy is stored in the capacitor?



e. Use the expression from question 7 to write two more independent forms of the equation from part b above.

13. The capacitor's charge (and stored energy) can be made available to an electric circuit, such as one in an electronic flash or a heart defibrillator. The capacitor can deliver the charge and energy faster than a battery can. A device that uses a great deal of energy in a short interval of time can best be described as

- | | | |
|-------------------|--------------------|-----------------------|
| ___ high voltage. | ___ high amperage. | ___ high charge. |
| ___ high energy. | ___ high wattage. | ___ high capacitance. |